







Adı :

Soyadı:

1 . Sınıf
Matematik

Geometrik Şekiller
Köşe-Kenar-4

Eşleştirelim, boyayalım.




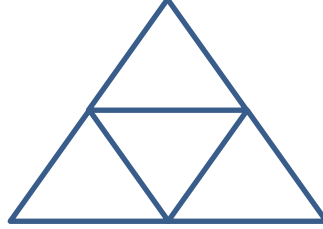

Adı :

Soyadı:

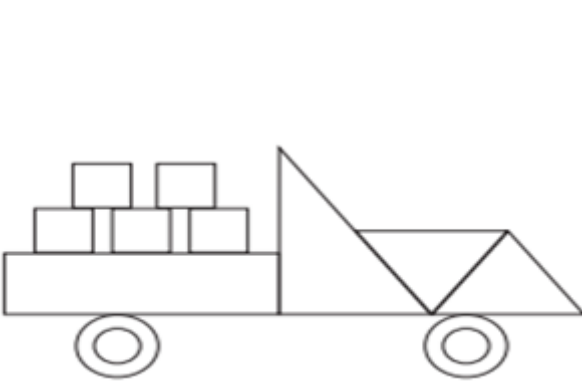
1 . Sınıf
Matematik

Geometrik Şekiller
Köşe-Kenar-4

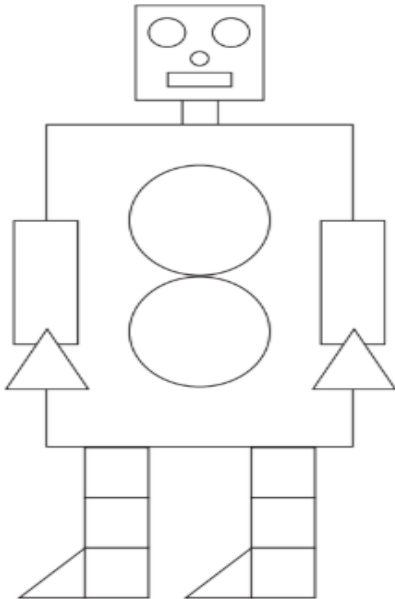
Kaç tane var?



Kaç tane var? Say, yaz, boya.



.....



.....